



# Cambridge IGCSE™


CANDIDATE  
NAME

CENTRE  
NUMBER

--	--	--	--	--

CANDIDATE  
NUMBER

--	--	--	--



**MATHEMATICS**

**0580/23**

Paper 2 (Extended)

**October/November 2022**

**1 hour 30 minutes**

You must answer on the question paper.

You will need: Geometrical instruments

## INSTRUCTIONS

- Answer **all** questions.
- Use a black or dark blue pen. You may use an HB pencil for any diagrams or graphs.
- Write your name, centre number and candidate number in the boxes at the top of the page.
- Write your answer to each question in the space provided.
- Do **not** use an erasable pen or correction fluid.
- Do **not** write on any bar codes.
- You should use a calculator where appropriate.
- You may use tracing paper.
- You must show all necessary working clearly.
- Give non-exact numerical answers correct to 3 significant figures, or 1 decimal place for angles in degrees, unless a different level of accuracy is specified in the question.
- For  $\pi$ , use either your calculator value or 3.142.

## INFORMATION

- The total mark for this paper is 70.
- The number of marks for each question or part question is shown in brackets [ ].

This document has **12** pages.

- 1 Marco starts work at 20 45 and finishes at 02 08 the next day.

Find the length of time, in hours and minutes, he works.

..... h ..... min [1]

2

120

121

149

164

216

From this list, write down

- (a) a square number

..... [1]

- (b) a cube number.

..... [1]

- 3 Calculate.

$$\sqrt{15} + \frac{4.8}{2.2}$$

..... [1]

- 4 The mean mass of four men in a rowing team is 97.5 kg.  
The modal mass is 101 kg.  
The range of the masses is 8 kg.

Find the mass of each of the four men.

..... kg , ..... kg , ..... kg, ..... kg [3]

- 5 **Without using a calculator**, work out  $\frac{5}{7} - \frac{2}{3}$ .

You must show all your working and give your answer as a fraction in its simplest form.

..... [2]

- 6 A spinner can land on the colours green, black or red.  
The table shows the probabilities of the spinner landing on green or black.

Colour	Green	Black	Red
Probability	$\frac{2}{5}$	$\frac{1}{4}$	

(a) Complete the table. [2]

(b) Chang spins the spinner 120 times.

Find the expected number of times it lands on green.

..... [1]

- 7 Find the lowest common multiple (LCM) of 36 and 60.

..... [2]

- 8  $A$  is the point  $(-3, 5)$  and  $B$  is the point  $(5, 2)$ .

Find the coordinates of the midpoint of the line  $AB$ .

( ..... , ..... ) [2]

9 Solve the simultaneous equations.

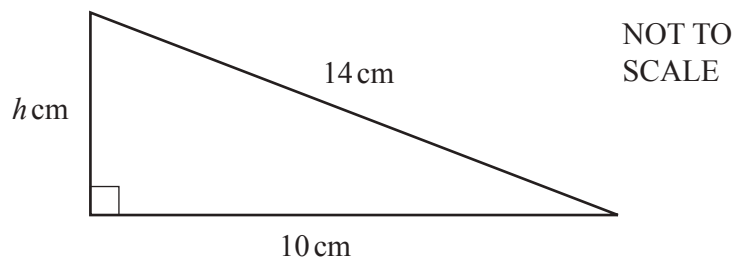
$$3x - 2y = 21$$

$$5x + 2y = 51$$

$$x = \dots\dots\dots$$

$$y = \dots\dots\dots [2]$$

10



The diagram shows a right-angled triangle.

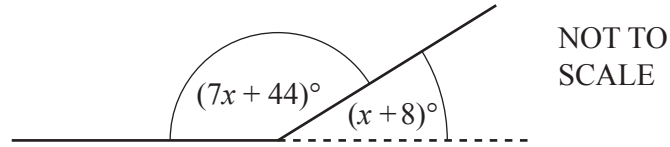
(a) Calculate the value of  $h$ .

$$h = \dots\dots\dots [3]$$

(b) Find the perimeter of this triangle.

$$\dots\dots\dots \text{ cm } [1]$$

11



The diagram shows two sides of a regular polygon.  
The interior angle of the polygon is  $(7x + 44)^\circ$  and the exterior angle is  $(x + 8)^\circ$ .

Find the number of sides of this polygon.

..... [4]

12 Keita invests \$4000 at a rate of 2.6% per year compound interest.

Work out the interest earned on the investment at the end of 3 years.

\$ ..... [3]

13 Convert  $0.2\dot{4}$  to a fraction.

You must show all your working and give your answer in its simplest form.

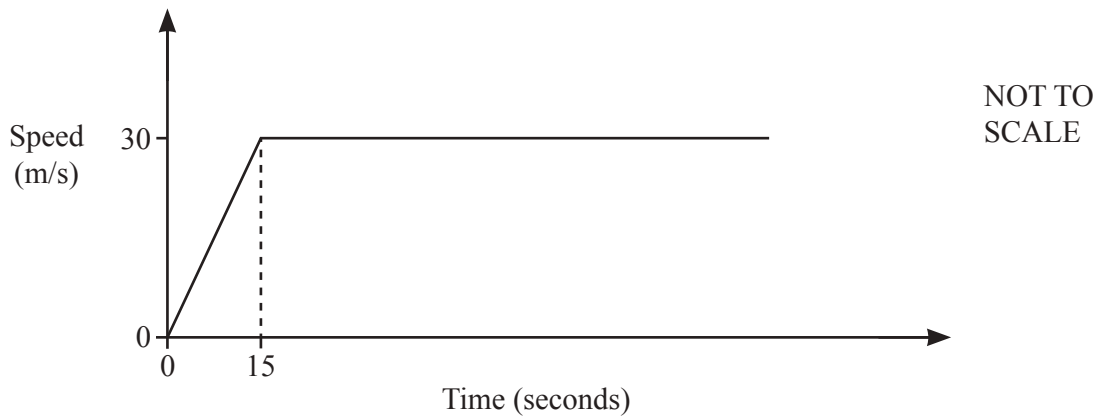
..... [2]

14 A map has a scale of 1 : 200 000.

Find the area, in square kilometres, of a lake that has an area of  $12.4 \text{ cm}^2$  on the map.

.....  $\text{km}^2$  [2]

15 The diagram shows the speed–time graph for part of the journey of a car.



The car starts from rest and accelerates at a uniform rate for 15 seconds before reaching a constant speed of 30 m/s.

(a) Calculate the acceleration for the first 15 seconds.

.....  $\text{m/s}^2$  [1]

(b) After  $T$  minutes, the total distance travelled is 45 kilometres.

Find the value of  $T$ .

$T =$  ..... min [4]

- 16** A kite is drawn on a coordinate grid.  
The diagonals of the kite intersect at the point  $(-2, -5)$ .

One diagonal has equation  $y = 4x + 3$ .

Find the equation of the other diagonal of the kite.  
Give your answer in the form  $y = mx + c$ .

$$y = \dots\dots\dots [3]$$

- 17**  $y$  is proportional to the square of  $(x - 7)$ .  
When  $x = 12$ ,  $y = 2$ .

Find  $y$  when  $x = 17$ .

$$y = \dots\dots\dots [3]$$

- 18** Two bottles are mathematically similar.  
The small bottle has a capacity of 324 ml and a height of 12 cm.  
The large bottle has a capacity of 768 ml.

Calculate the height of the large bottle.

$$\dots\dots\dots \text{ cm } [3]$$



19  $f(x) = 5x - 3, x > 1$

$$g(x) = \frac{10}{x-2}, x \neq 2$$

- (a) Find  $gf(x)$ .  
Give your answer in its simplest form.

..... [2]

- (b) Find  $g^{-1}(x)$ .

$g^{-1}(x) =$  ..... [3]

- (c) Find  $ff^{-1}(x-1)$ .

..... [1]

20 (a)

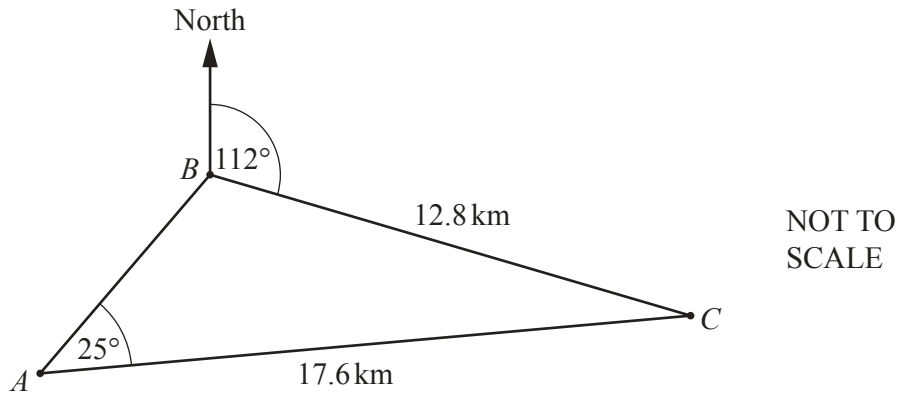


Sketch the graph of  $y = \sin x$  for  $0^\circ \leq x \leq 360^\circ$ .

[2]

(b) Solve  $3 - 2 \sin x = \frac{13}{4}$  for  $0^\circ \leq x \leq 360^\circ$ .

$x = \dots\dots\dots$  or  $x = \dots\dots\dots$  [3]



The diagram shows the positions of three ships  $A$ ,  $B$  and  $C$ .  
 $AC = 17.6 \text{ km}$ ,  $BC = 12.8 \text{ km}$  and angle  $BAC = 25^\circ$ .  
 The bearing of  $C$  from  $B$  is  $112^\circ$  and angle  $ABC$  is obtuse.

Calculate the bearing of  $B$  from  $A$ .

..... [5]

**Question 22 is printed on the next page.**

22 (a) Expand and simplify.

$$(2x - 1)(x + 4)(x - 3)$$

..... [3]

(b) Write as a single fraction in its simplest form.

$$\frac{4}{2x - 3} \div \frac{2x^2 + 14x}{2x^2 + 11x - 21}$$

..... [4]

---

Permission to reproduce items where third-party owned material protected by copyright is included has been sought and cleared where possible. Every reasonable effort has been made by the publisher (UCLES) to trace copyright holders, but if any items requiring clearance have unwittingly been included, the publisher will be pleased to make amends at the earliest possible opportunity.

To avoid the issue of disclosure of answer-related information to candidates, all copyright acknowledgements are reproduced online in the Cambridge Assessment International Education Copyright Acknowledgements Booklet. This is produced for each series of examinations and is freely available to download at [www.cambridgeinternational.org](http://www.cambridgeinternational.org) after the live examination series.

Cambridge Assessment International Education is part of Cambridge Assessment. Cambridge Assessment is the brand name of the University of Cambridge Local Examinations Syndicate (UCLES), which is a department of the University of Cambridge.