

- 1 Ahmed drives his car from London to Cambridge.
He leaves London at 0745 and arrives in Cambridge at 1017.

Work out the time, in hours and minutes, that he takes to drive from London to Cambridge.

..... h min [1]

- 2 Work out 16% of \$525.

\$ [1]

- 3 A quadrilateral has one line of symmetry and no rotational symmetry.

Write down the name of this quadrilateral.

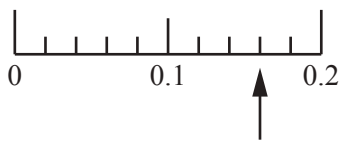
..... [1]

- 4 Simplify.

$$y^4 \times y^5$$

..... [1]

- 5 (a)



Write down the number the arrow is pointing to on this scale.

..... [1]

- (b) Write these numbers in order of size, starting with the smallest.

0.42 0.06 0.5 0.078

..... < < < [1]
smallest

- 6 A bag contains 16 counters.
3 are red, 6 are blue and the rest are yellow.
Jay takes a counter from the bag at random.

(a) Write down the colour Jay is most likely to take.

..... [1]

(b) Write down the probability that the counter is red.

..... [1]

- 7 Complete the table.

Fraction		Decimal		Percentage
$\frac{1}{4}$	=		=	25%
	=	0.8	=	

[2]

8 $\mathbf{s} = \begin{pmatrix} 3 \\ -1 \end{pmatrix}$ $\mathbf{t} = \begin{pmatrix} 4 \\ 2 \end{pmatrix}$

Work out $5\mathbf{s} - \mathbf{t}$.

$\begin{pmatrix} \\ \end{pmatrix}$ [2]

9 Solve the equation.

$$5x + 4 = 19 + 2x$$

$$x = \dots\dots\dots [2]$$

10 By writing each number correct to 1 significant figure, estimate the value of $\frac{59.2 \times 1.97}{2.04 + 3.85}$.

$$\dots\dots\dots [2]$$

11 In a survey of 40 workers, 6 cycle to the office.
The office has a total of 800 workers.

Estimate how many of the 800 workers cycle to the office.

$$\dots\dots\dots [2]$$

- 12 Adilla invests \$1200 at a rate of 2.6% per year compound interest.

Calculate the value of her investment at the end of 2 years.

\$ [2]

- 13 The table shows the temperature at midday in some cities on 1st February.

City	Temperature
Berlin	6 °C
Moscow	-10 °C
Stockholm	1 °C
Toronto	0 °C
Warsaw	-2 °C

- (a) Write down the city with the lowest temperature.

..... [1]

- (b) Work out the difference between the temperature in Berlin and the temperature in Warsaw.

..... °C [1]

- (c) The temperature in Minsk was 3 °C higher than the temperature in Moscow.

Work out the temperature in Minsk.

..... °C [1]

14 The mass, correct to the nearest gram, of each of 20 potatoes is shown below.

85 97 125 100 90 102 116 89 96 104
 89 107 106 93 84 118 120 98 112 109

- (a) Complete the frequency table.
 You may use the tally column to help you.

Mass (g)	Tally	Frequency
80 to 89		
90 to 99		
100 to 109		
110 to 119		
120 to 129		

[2]

- (b) Write down the modal group.

..... [1]

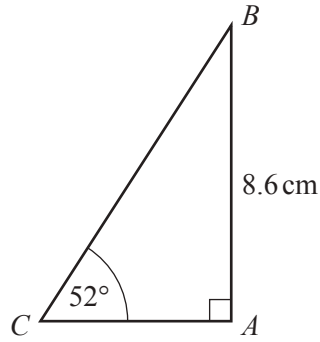
15 Calculate the size of one interior angle of a regular 12-sided polygon.

..... [3]

16 Work out $3\frac{1}{7} - 1\frac{1}{4}$, giving your answer as a mixed number in its lowest terms.
Do not use a calculator and show all the steps of your working.

..... [3]

17

NOT TO
SCALE

ABC is a right-angled triangle.

Use trigonometry to calculate BC .

$BC = \dots\dots\dots$ cm [3]

18 (a) Write 1.8×10^4 as an ordinary number.

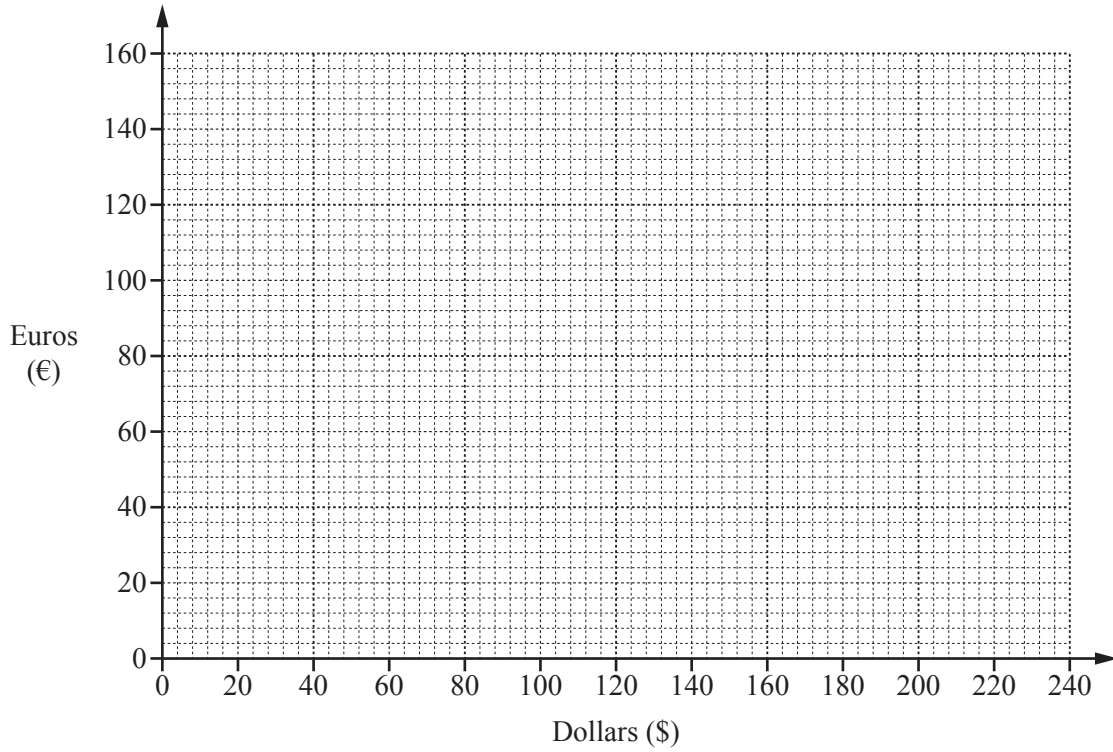
$\dots\dots\dots$ [1]

(b) Calculate $(2.9 \times 10^6) - (7.5 \times 10^5)$.
Give your answer in standard form.

$\dots\dots\dots$ [2]

19 Alvin changes some money from dollars (\$) to euros (€).
When he changes \$100 he receives €60.

(a) On the grid, draw a conversion graph using this information.



[2]

(b) Use your graph to change

(i) \$140 to euros,

€ [1]

(ii) €20 to dollars.

\$ [1]

20 (a) These are the first five terms of a sequence.

4 10 16 22 28

(i) Write down the next term.

..... [1]

(ii) Write down the rule for continuing the sequence.

..... [1]

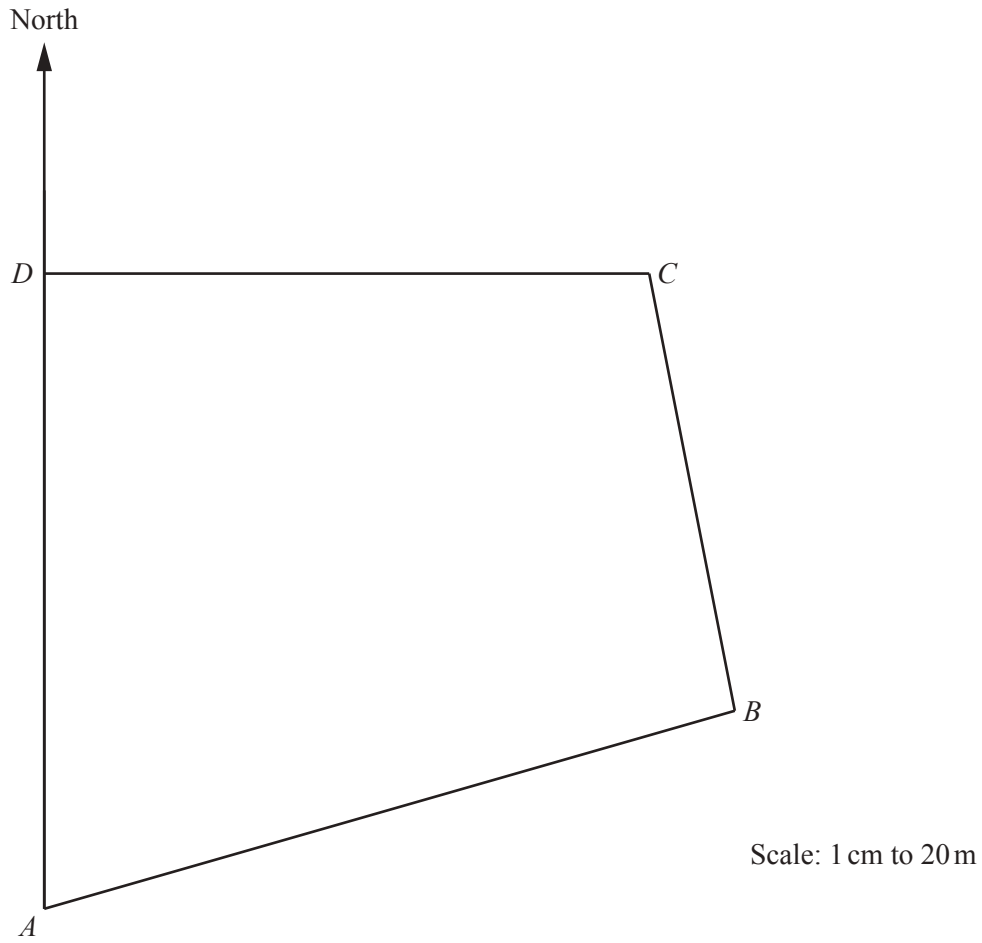
(b) These are the first five terms of a different sequence.

11 14 17 20 23

Find an expression for the n th term of this sequence.

..... [2]

- 21 The scale drawing shows a park $ABCD$.
The scale is 1 centimetre represents 20 metres.



- (a) Find the actual distance AD .

..... m [2]

- (b) Measure the bearing of B from A .

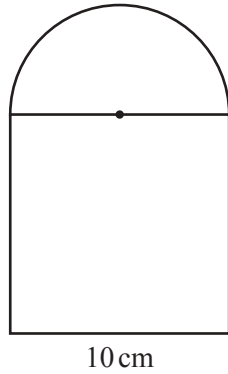
..... [1]

- (c) There is a path across the park that is equidistant from CB and CD .

Using a straight edge and compasses only, construct the position of the path.
Show your construction arcs.

[2]

Question 22 is printed on the next page.



NOT TO
SCALE

The diagram shows a shape made from a square and a semi-circle.

Calculate the area of the shape.
Give the units of your answer.

..... [5]

Permission to reproduce items where third-party owned material protected by copyright is included has been sought and cleared where possible. Every reasonable effort has been made by the publisher (UCLES) to trace copyright holders, but if any items requiring clearance have unwittingly been included, the publisher will be pleased to make amends at the earliest possible opportunity.

To avoid the issue of disclosure of answer-related information to candidates, all copyright acknowledgements are reproduced online in the Cambridge International Examinations Copyright Acknowledgements Booklet. This is produced for each series of examinations and is freely available to download at www.cie.org.uk after the live examination series.

Cambridge International Examinations is part of the Cambridge Assessment Group. Cambridge Assessment is the brand name of University of Cambridge Local Examinations Syndicate (UCLES), which is itself a department of the University of Cambridge.