



Cambridge IGCSE™

CANDIDATE
NAME


--

CENTRE
NUMBER

--	--	--	--	--

CANDIDATE
NUMBER

--	--	--	--



MATHEMATICS

0580/13

Paper 1 (Core)

October/November 2021

1 hour

You must answer on the question paper.

You will need: Geometrical instruments

INSTRUCTIONS

- Answer **all** questions.
- Use a black or dark blue pen. You may use an HB pencil for any diagrams or graphs.
- Write your name, centre number and candidate number in the boxes at the top of the page.
- Write your answer to each question in the space provided.
- Do **not** use an erasable pen or correction fluid.
- Do **not** write on any bar codes.
- You should use a calculator where appropriate.
- You may use tracing paper.
- You must show all necessary working clearly.
- Give non-exact numerical answers correct to 3 significant figures, or 1 decimal place for angles in degrees, unless a different level of accuracy is specified in the question.
- For π , use either your calculator value or 3.142.

INFORMATION

- The total mark for this paper is 56.
- The number of marks for each question or part question is shown in brackets [].

This document has **12** pages. Any blank pages are indicated.

1 Write

(a) $\frac{1}{2}$ as a percentage,

..... % [1]

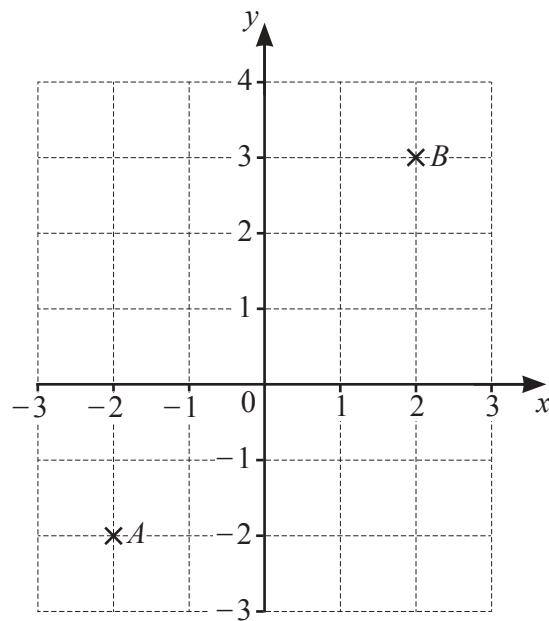
(b) 0.7 as a fraction,

..... [1]

(c) $\frac{11}{20}$ as a decimal.

..... [1]

2 Points A and B are plotted on the grid.



(a) Write down the coordinates of point B .

(..... ,) [1]

(b) Write \vec{AB} as a vector.

$\left(\begin{array}{c} \\ \end{array} \right)$ [1]

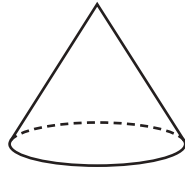
(c) On the grid, plot point C at $(-2, 3)$.

[1]

3 Find the number of minutes in $4\frac{1}{2}$ hours.

..... min [1]

4

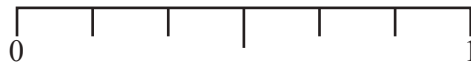


Write down the mathematical name of this solid.

..... [1]

5 Cheng spins a fair 6-sided spinner numbered 1 to 6.

On the probability scale, draw an arrow (\downarrow) to show the probability that the spinner lands on 4.



[1]

6

62 43 16 21 73 16 33 16 35

For this list of numbers find

(a) the mode,

..... [1]

(b) the median.

..... [2]

7 $r = 2t + 3u$

Work out the value of t when $r = 18$ and $u = 4$.

$t = \dots\dots\dots$ [2]

8 The temperature at midnight was -8°C .
The temperature at noon is 6°C .

(a) Work out the difference between these two temperatures.

$\dots\dots\dots^\circ\text{C}$ [1]

(b) The temperature at 7 am is 5°C higher than the temperature at midnight.

Work out the temperature at 7 am.

$\dots\dots\dots^\circ\text{C}$ [1]

9 The probability that it rains tomorrow is 0.47 .

Find the probability that it does not rain tomorrow.

$\dots\dots\dots$ [1]

10 Write 26 g as a percentage of 208 g.

..... % [1]

11

11 13 15 17 19

From this list, write down the number that is both a prime number and a factor of 195.

..... [1]

12 (a) = \neq > <

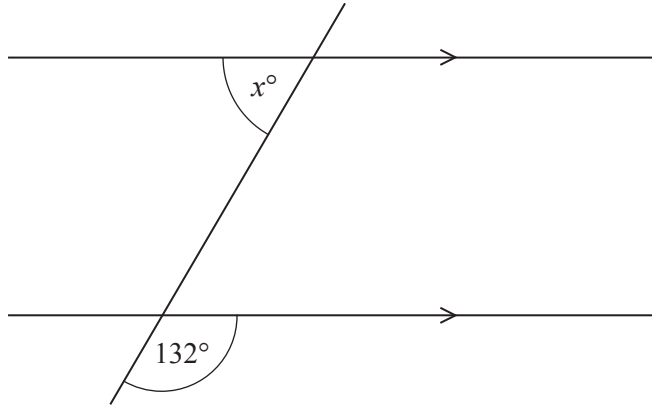
Put a ring around each of the symbols that make this statement correct.

0.5 5% [1]

(b) Insert one pair of brackets to make this statement correct.

$7 - 3 - 1 + 2 = 7$ [1]

13

NOT TO
SCALE

The diagram shows two parallel lines intersecting a straight line.

Find the value of x .

$x = \dots\dots\dots$ [2]

14 (a) These are the first four terms of a sequence.

17 23 29 35

Find the next term.

$\dots\dots\dots$ [1]

(b) These are the first four terms of a different sequence.

3 -1 -5 -9

(i) Find the next term in this sequence.

$\dots\dots\dots$ [1]

(ii) Find the n th term.

$\dots\dots\dots$ [2]

- 15** Sara takes 5 tests.
Her mean score is 62.
She takes another test and her mean score is now 68.

Work out her score in the sixth test.

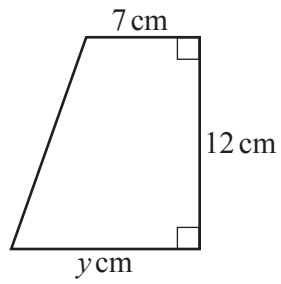
..... [3]

- 16** Nina changes 153 euros into dollars when the exchange rate is $\$1 = 0.9$ euros.

Calculate the amount Nina receives.

\$ [1]

17

NOT TO
SCALE

The area of this trapezium is 96 cm^2 .

Find the value of y .

$y = \dots\dots\dots$ [3]

- 18** Marek buys a computer for \$420.
He sells it at a loss of 15%.

Calculate the selling price of this computer.

\$ $\dots\dots\dots$ [2]

- 19** Calculate the radius of a circle with circumference 26 cm.

$\dots\dots\dots$ cm [2]

20 By writing each number in the calculation correct to 1 significant figure, find an estimate for the value of

$$\frac{4.3 \times 30.7}{6.6 - 1.8}$$

..... [2]

21 Find the interior angle of a regular 7-sided polygon.

..... [2]

22 **Without using a calculator**, work out $\frac{11}{12} + \frac{3}{4}$.

You must show all your working and give your answer as a mixed number in its simplest form.

..... [3]

23 (a) Simplify.

$$32g^{32} \div 4g^4$$

..... [2]

(b) Factorise completely.

$$10j - 15j^2$$

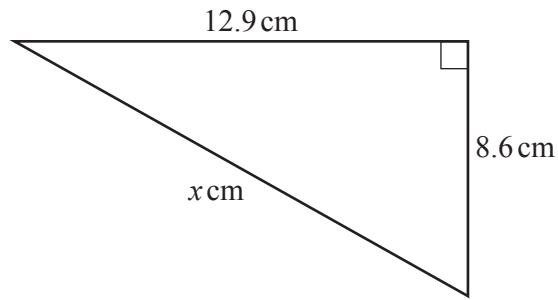
..... [2]

(c) Expand the brackets and simplify.

$$(x + 7)(x + 3)$$

..... [2]

24 (a)

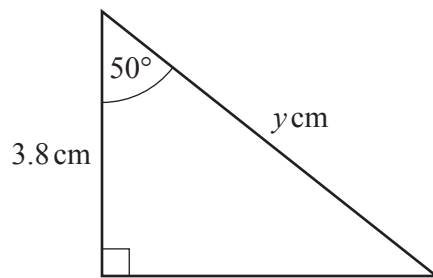


NOT TO SCALE

Calculate the value of x .

$x = \dots\dots\dots$ [2]

(b)



NOT TO SCALE

Show that the value of y is 5.9, correct to 2 significant figures.

[3]

BLANK PAGE

Permission to reproduce items where third-party owned material protected by copyright is included has been sought and cleared where possible. Every reasonable effort has been made by the publisher (UCLES) to trace copyright holders, but if any items requiring clearance have unwittingly been included, the publisher will be pleased to make amends at the earliest possible opportunity.

To avoid the issue of disclosure of answer-related information to candidates, all copyright acknowledgements are reproduced online in the Cambridge Assessment International Education Copyright Acknowledgements Booklet. This is produced for each series of examinations and is freely available to download at www.cambridgeinternational.org after the live examination series.

Cambridge Assessment International Education is part of the Cambridge Assessment Group. Cambridge Assessment is the brand name of the University of Cambridge Local Examinations Syndicate (UCLES), which itself is a department of the University of Cambridge.